

DO NOT WRITE/MARK ON THIS PAPER

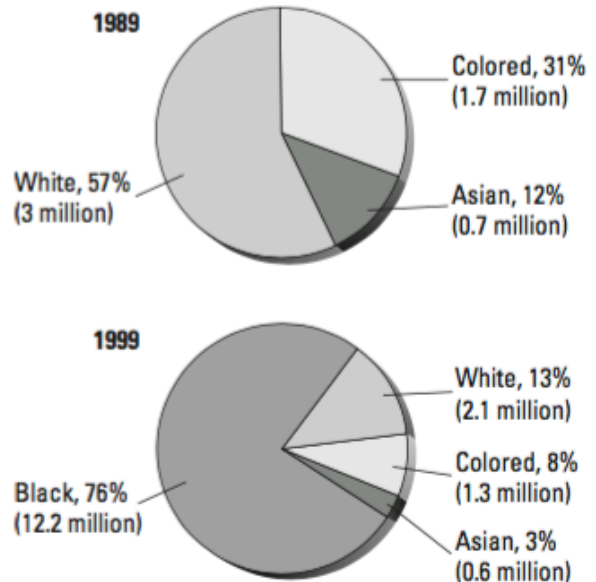
23.4 Protests Lead to Political Change

Step 1: Read Section 23.4. Look carefully at the picture **and** graphs in this section. Find at least three pieces of evidence that help prove whether this statement is true or false: *After Apartheid ended, South Africa was a better place.*



After apartheid ended in 1994, black South Africans were able to run for office.

Voter Turnout in South Africa

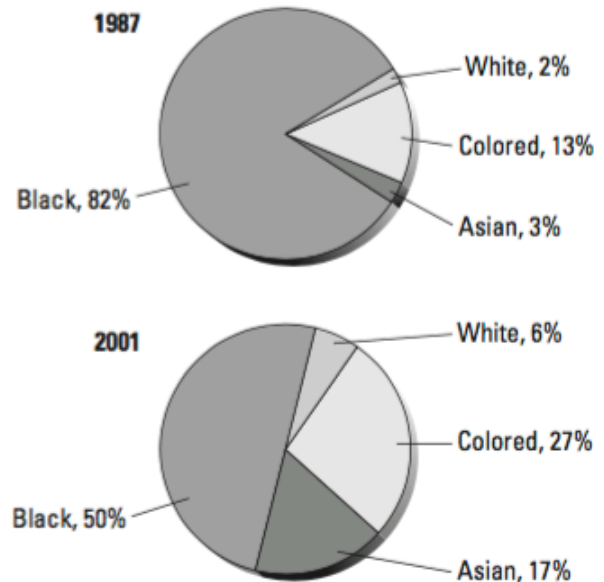


23.5 South Africa Today: Job Opportunities

Step 1: Read Section 23.5. Look carefully at the picture **and** graphs in this section. Find at least three pieces of evidence that help prove whether this statement is true or false: *After Apartheid ended, South Africa was a better place.*



Unemployed South Africans



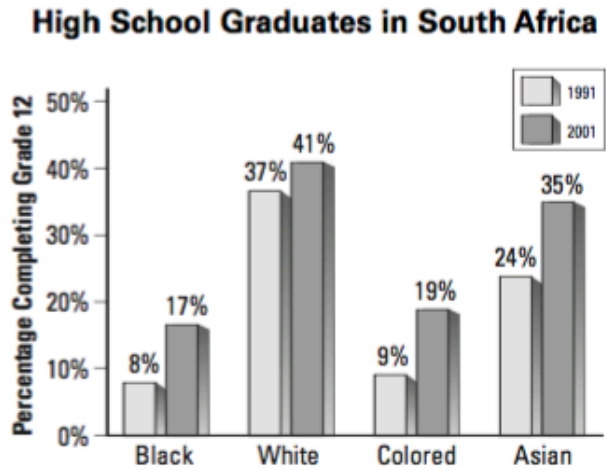
DO NOT WRITE/MARK ON THIS PAPER

23.6 South Africa Today: Education

Step 1: Read Section 23.6. Look carefully at the picture **and** graphs in this section. Find at least three pieces of evidence that help prove whether this statement is true or false: *After Apartheid ended, South Africa was a better place.*



Today all students, not just whites, learn reading, writing, math, and science in school.



23.7 South Africa Today: Living Conditions

Step 1: Read Section 23.7. Look carefully at the picture **and** graphs in this section. Find at least three pieces of evidence that help prove whether this statement is true or false: *After Apartheid ended, South Africa was a better place.*



Although few in number, some nonwhites live in formerly white-only, nice neighborhoods in South Africa's cities.

